

# Experiment 13

## NMR Spectroscopy: Determination of Molecular Structures

**Reading:** Organic Chemistry, Marc Loudon, 5th ed., pp. 578-616 (13.1-13.7); pp. 629-636 (13.10-13.12). Handbook for Organic Chemistry Lab, chapters on NMR Spectroscopy (Chapter 18) and Identification of Compounds (Chapter 20).

This lab consists of three assignments, split over two lab meetings:

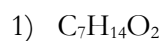
- 1) During today's lab meeting, your TA will present a tutorial on how to use NMR spectra to determine the structure of a compound. You will work on a **spectroscopy worksheet** and turn it in before you leave. The worksheet is contained in your experiment manual, in the following pages, but you can also print a copy from the course website if you need to.
- 2) A **spectroscopy homework** is available in PDF format, linked from the course website. You only need to do ten of the problems in this homework; your TA will give you more details about which ones to do. (This also means that you do not have to print the entire homework packet, only the pages that you need.) This homework is due in one week.
- 3) Immediately after you turn in the homework, you will take an **NMR quiz** that is similar in format to the homework problems, except there are only two problems to solve. The back cover of your experiment manual contains an NMR reference sheet that you will be allowed to use during the NMR quiz.

NMR spectroscopy is a significant portion of your grade for the semester, so be sure to get enough practice that you can solve these problems in a reasonable amount of time.

## Experiment 13: NMR Spectroscopy

**Spectroscopy In-Class Worksheet** Name \_\_\_\_\_**Part 1**

Given the molecular formula, calculate the degree of unsaturation for the following compounds. Suggest at least three possible structures consistent with the degree of unsaturation for each compound. (Special case: A nitro group,  $-\text{NO}_2$ , has one degree of unsaturation. This information doesn't matter when you are calculating the degree of unsaturation, but it might matter when you start drawing structures.)

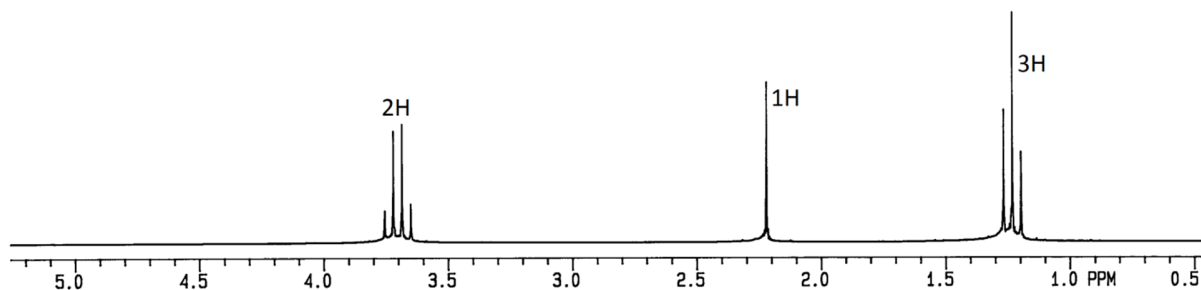
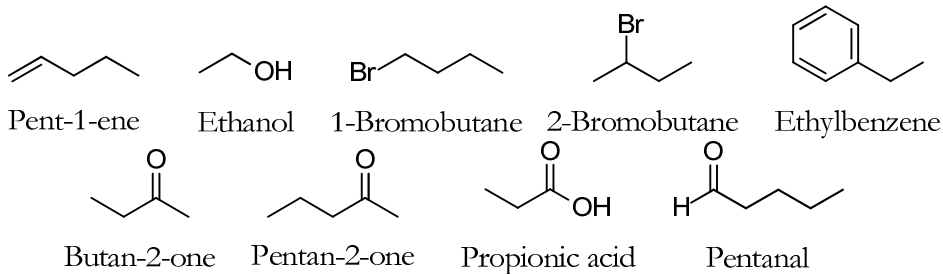
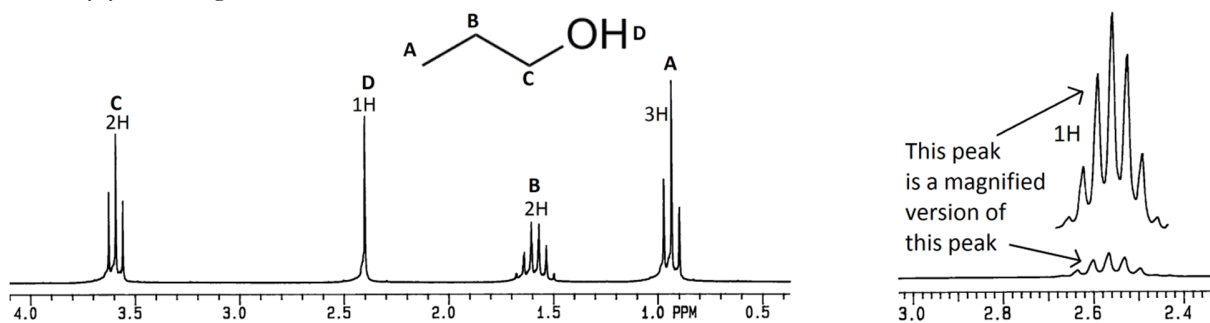


## Experiment 13: NMR Spectroscopy

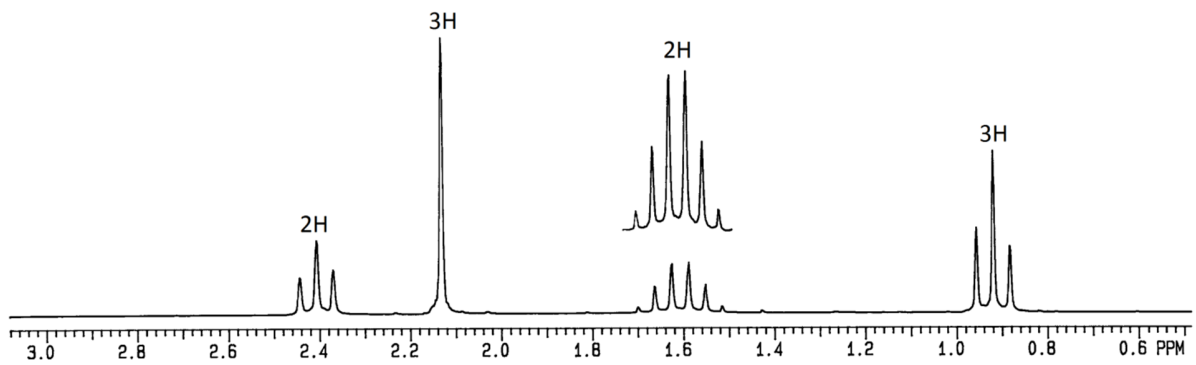
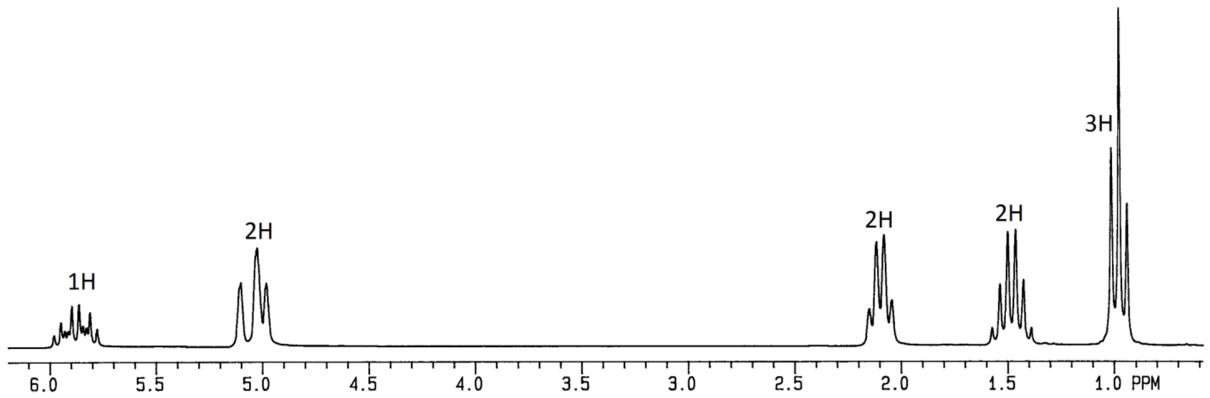
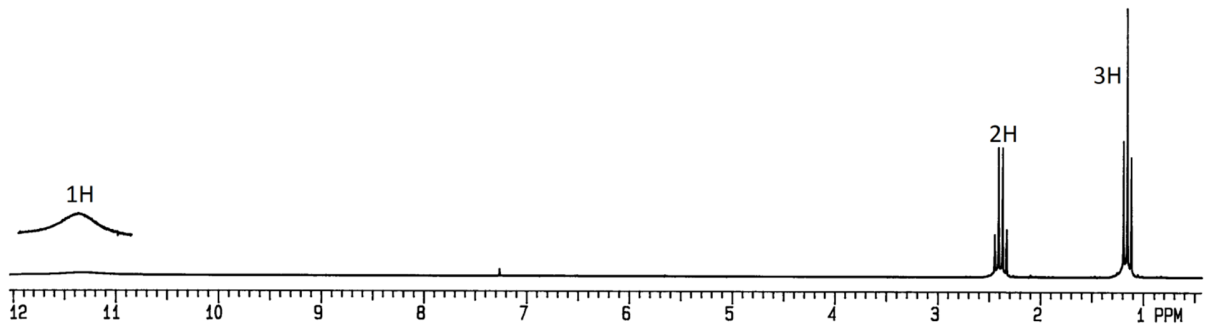
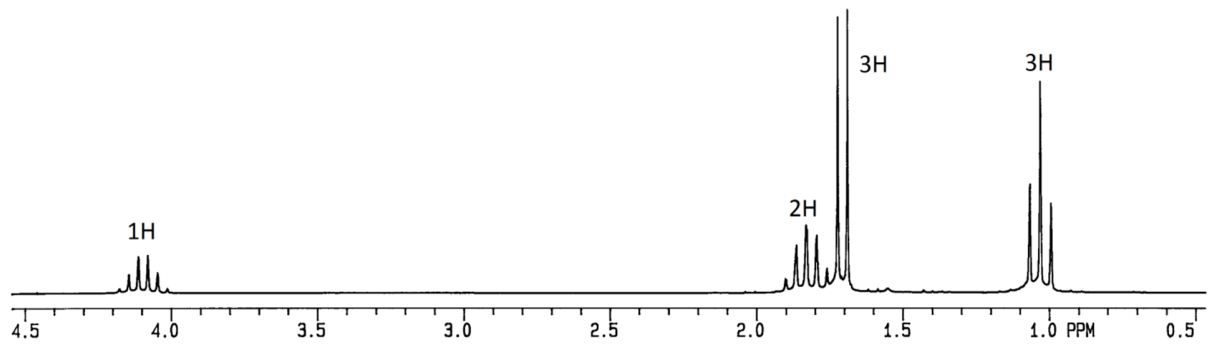
### Part 2

Nine compounds are drawn below. The NMR spectrum for each is among the nine spectra on the following 3 pages.

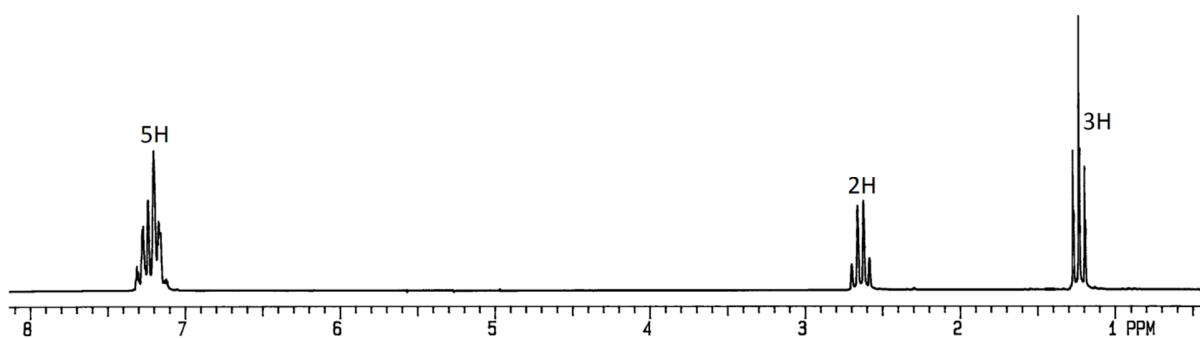
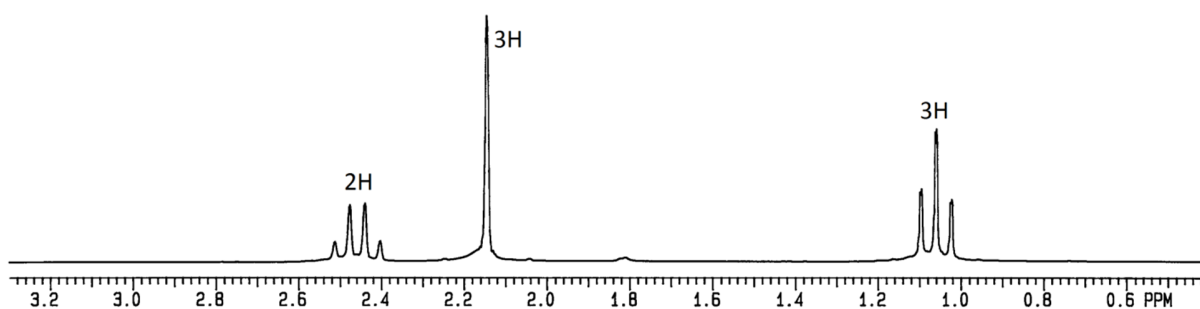
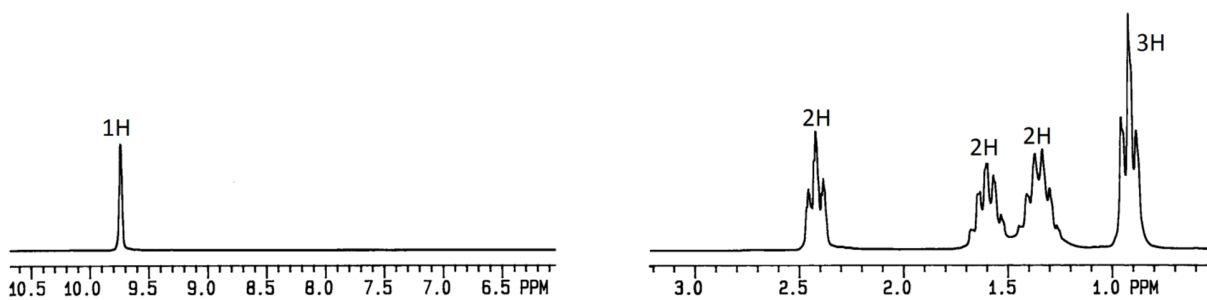
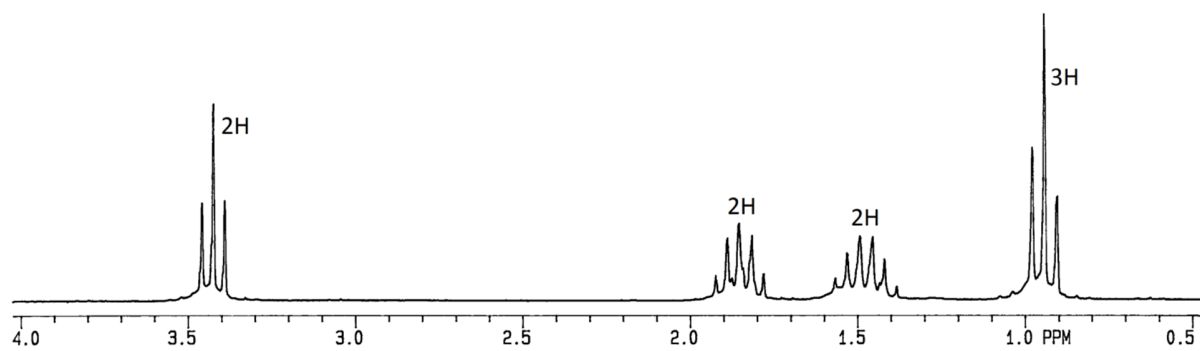
- 1) Match each compound with its NMR.
- 2) Draw the structure above the corresponding spectrum.
- 3) Label each type of proton in the structure with a letter, and put the same letter over the corresponding peak on the NMR spectrum (see example below). Some NMR spectra show a peak hovering above the baseline. This is a magnified view of one of the actual peaks, to allow you to see splitting more clearly.
- 4) Write down one or two bands which you would look for in the IR spectrum of the compound to verify your assignment.



Experiment 13: NMR Spectroscopy



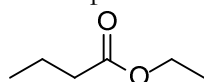
# Experiment 13: NMR Spectroscopy



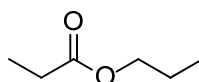
**Part 3**

The structures of ethyl butanoate and propyl butanoate are drawn below. Note how each has an ethyl group and a propyl group; the only difference is how they are orientated around the ester functional group. The way to distinguish between the carbons on either side of the ester group is by chemical shift: the carbon next to the oxygen will usually have a shift of 3-4 ppm, while the carbon next to the carbonyl will usually have a shift of 2-3 ppm.

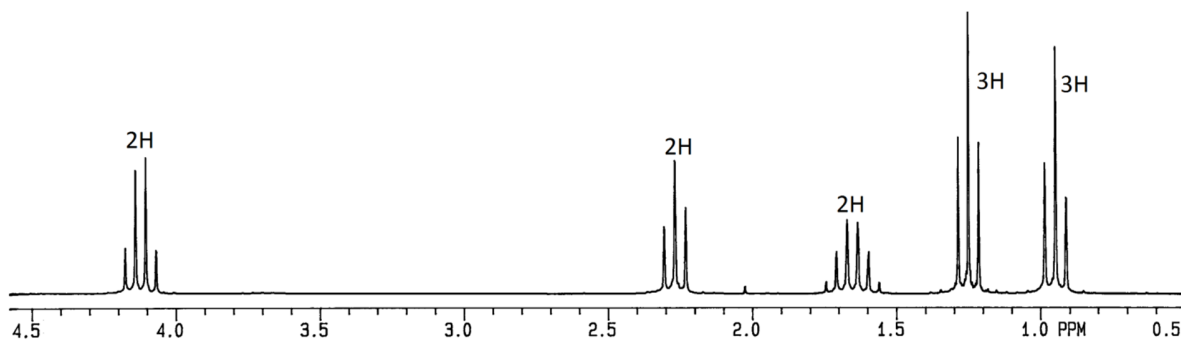
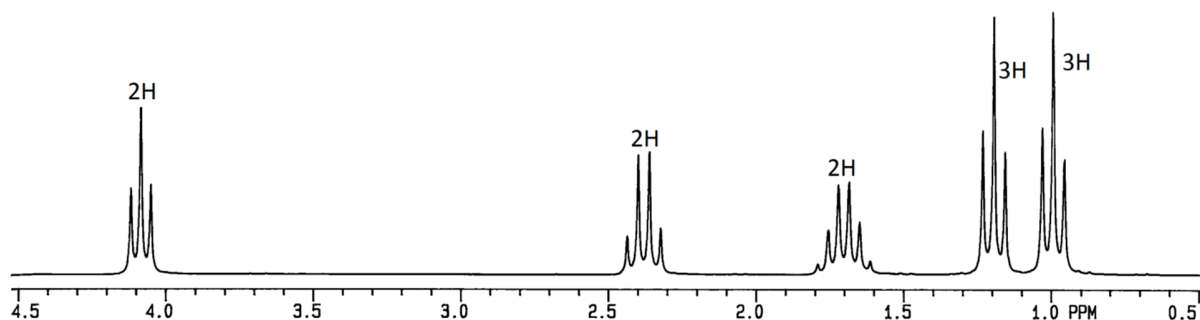
- 1) Match each compound with its NMR.
- 2) Draw the structure above the corresponding spectrum.
- 3) Label each type of proton in the structure with a letter, and put the same letter over the corresponding peak on the NMR spectrum.



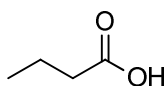
Ethyl butyrate



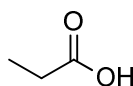
Propyl propionate



**Note:** Esters are named from their parent carboxylic acid. For example, ethyl butanoate is derived from butanoic acid and propyl propanoate is derived from propanoic acid.



Butyric acid



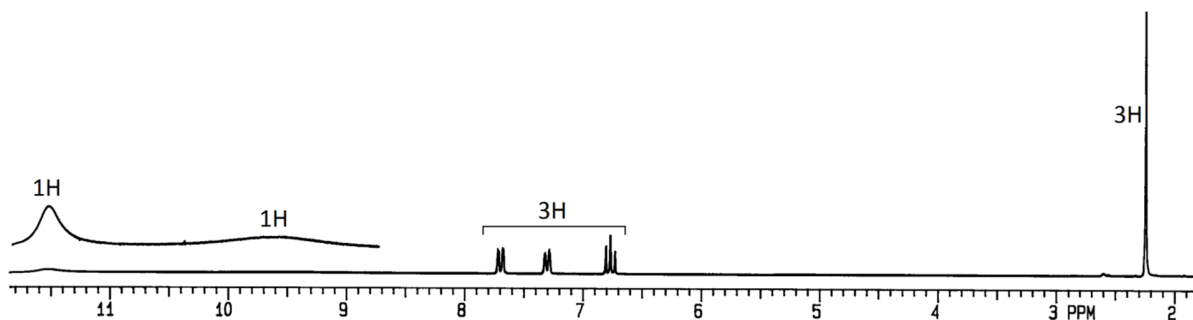
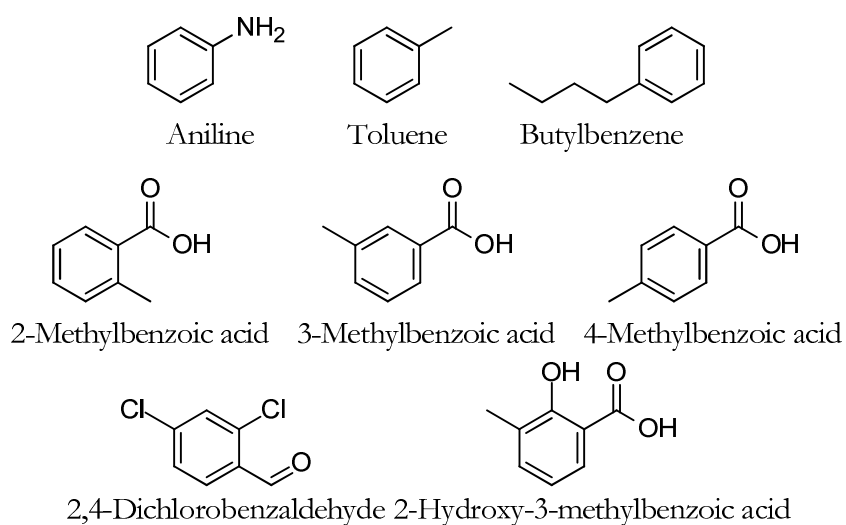
Propionic acid

## Experiment 13: NMR Spectroscopy

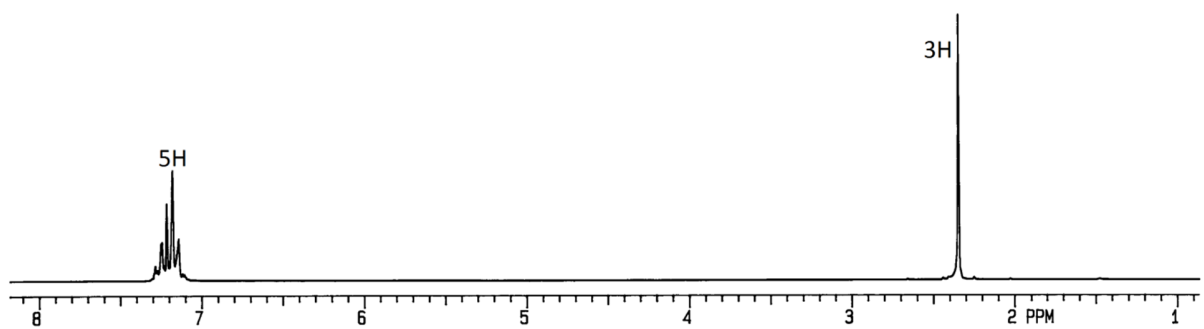
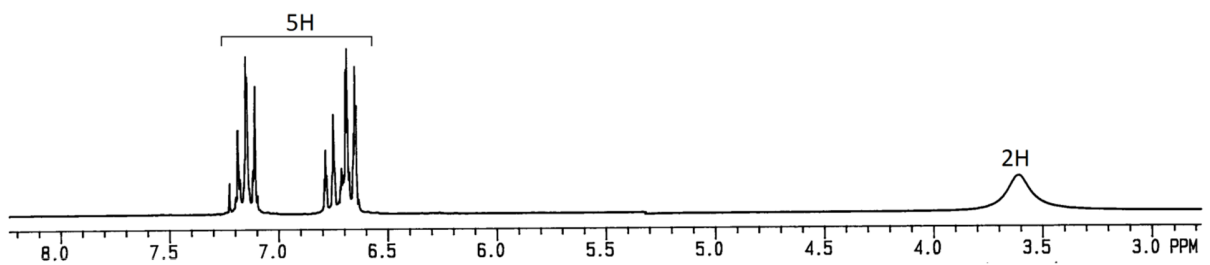
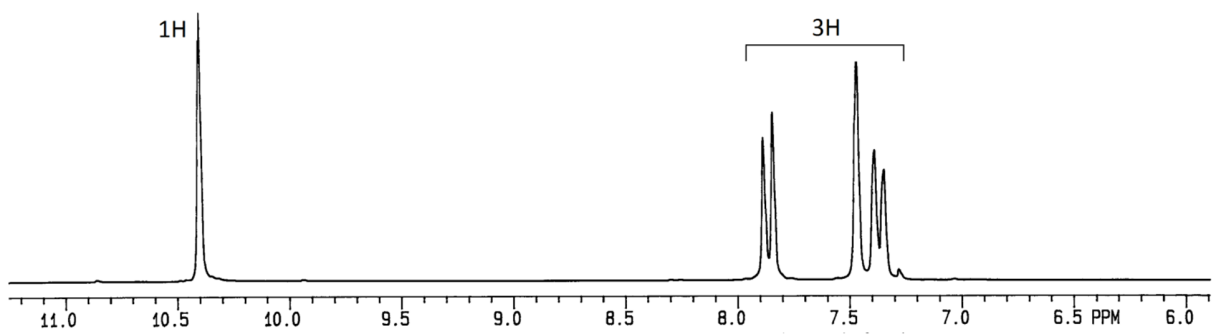
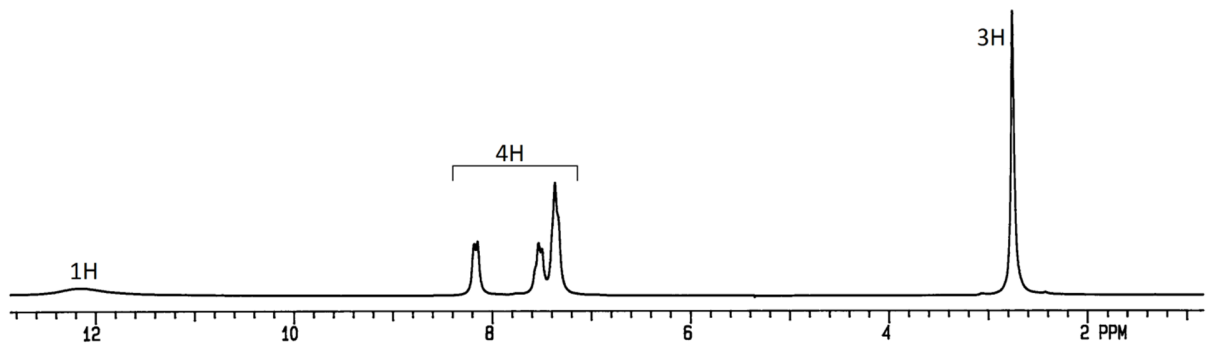
### Part 4

The eight spectra on the following pages represent mono, di, and trisubstituted aromatic compounds. An example of each type of disubstituted compounds is represented: ortho, meta, and para substituted. The structures of the compounds which correspond to the eight spectra are drawn below.

- 1) Match each compound with its NMR. You probably will not be able to tell an ortho from a meta substituted compound; you will not be marked off if you have these wrong. You *will* be marked off if you mix up a para with an ortho or meta substituted compound. Remember, para compounds are distinguished by their symmetric pair of doublets in the aromatic region.
- 2) Draw the structure above the spectrum and indicate which proton(s) correspond to which NMR peak. You do not have to assign each proton on the aromatic ring to a specific peak in the NMR aromatic region—simply indicate that they are somewhere in the aromatic grouping of NMR peaks.



Experiment 13: NMR Spectroscopy



Experiment 13: NMR Spectroscopy

